

Part A: Enumeration

§3: Binomial Coefficients

Notation 3.1

If Y is a set of size k then we say that Y is a k -set. To emphasise that Y is a subset of some other set X then we may say that Y is a k -subset of X .

We shall define binomial coefficients combinatorially.

Definition 3.2

Let $n, k \in \mathbf{N}_0$. Let $X = \{1, 2, \dots, n\}$. The *binomial coefficient* $\binom{n}{k}$ is the number of k -subsets of X .

Bijection Proofs

We should prove that the combinatorial definition agrees with the usual one. This proof generalizes Question 2 on the Preliminary Problem Sheet (answers available from Moodle).

Lemma 3.3

If $n, k \in \mathbf{N}_0$ and $k \leq n$ then

$$\binom{n}{k} = \frac{n(n-1)\dots(n-k+1)}{k!} = \frac{n!}{k!(n-k)!}.$$

Bijection Proofs

We should prove that the combinatorial definition agrees with the usual one. This proof generalizes Question 2 on the Preliminary Problem Sheet (answers available from Moodle).

Lemma 3.3

If $n, k \in \mathbf{N}_0$ and $k \leq n$ then

$$\binom{n}{k} = \frac{n(n-1)\dots(n-k+1)}{k!} = \frac{n!}{k!(n-k)!}.$$

Exercise: give an alternative proof of Lemma 3.3 by double counting the set of pairs

$$(X, (a_1, \dots, a_k))$$

such that $X = \{a_1, \dots, a_k\} \subseteq \{1, \dots, n\}$.

Lemma 3.4

If $n, k \in \mathbf{N}_0$ then

$$\binom{n}{k} = \binom{n}{n-k}.$$

More Bijective Proofs

Lemma 3.5 (Fundamental Recurrence)

If $n, k \in \mathbf{N}$ then

$$\binom{n}{k} = \binom{n-1}{k-1} + \binom{n-1}{k}.$$

Exercise: Prove bijectively that $(n-r)\binom{n}{r} = (r+1)\binom{n}{r+1}$ if $0 \leq r \leq n$.

More Bijective Proofs

Lemma 3.5 (Fundamental Recurrence)

If $n, k \in \mathbf{N}$ then

$$\binom{n}{k} = \binom{n-1}{k-1} + \binom{n-1}{k}.$$

Exercise: Prove bijectively that $(n-r)\binom{n}{r} = (r+1)\binom{n}{r+1}$ if $0 \leq r \leq n$.

Binomial coefficients are so-named because of the famous binomial theorem. (A binomial is a term of the form $x^r y^s$.)

Theorem 3.6 (Binomial Theorem)

Let $x, y \in \mathbf{C}$. If $n \in \mathbf{N}_0$ then

$$(x + y)^n = \sum_{k=0}^n \binom{n}{k} x^k y^{n-k}.$$

Example of Bijection in Lemma 3.5

$\binom{5}{3}$ counts size of $\left\{ \{1,2,3\}, \{1,2,4\}, \{1,3,5\}, \dots \right.$
 $\left. \dots, \{2,3,5\}, \{2,4,5\}, \{3,4,5\} \right\}$

CASE 1
contains 5

$\left\{ \{1,2,5\}, \{1,3,5\}, \{1,4,5\} \right.$
 $\left. \{2,3,5\}, \{2,4,5\}, \{3,4,5\} \right\}$

Add 5 $\left(\begin{array}{l} \uparrow \\ \downarrow \end{array} \right)$ Remove 5

$\left\{ \{1,2\}, \{1,3\}, \{1,4\} \right.$
 $\left. \{2,3\}, \{2,4\}, \{3,4\} \right\}$
counted by $\binom{4}{2}$

CASE 2

$\left\{ \{1,2,3\}, \{1,2,4\} \right.$
 $\left. \{1,3,4\}, \{2,3,4\} \right\}$
counted by $\binom{4}{3}$

Example of Bijection in Theorem 3.6 (Binomial Theorem)

The 3-subset $\{1, 2, 5\}$ corresponds to expanding $(x + y)^5$ by choosing x from terms 1, 2 and 5, and y from the other terms, obtaining x^3y^2 . Since there are $\binom{5}{3} = 10$ distinct 3-subsets of $\{1, 2, 3, 4, 5\}$, the coefficient of x^3y^2 is 10.

$$(x+y)^5 = (x+y)^1 (x+y)^2 (x+y)^3 (x+y)^4 (x+y)^5$$

$$x^3 y^2$$

Coefficient of $x^3 y^2$ is the number of 3-subsets of $\{1, 2, 3, 4, 5\}$

Example of Bijection in Theorem 3.6 (Binomial Theorem)

The 3-subset $\{1, 2, 5\}$ corresponds to expanding $(x + y)^5$ by choosing x from terms 1, 2 and 5, and y from the other terms, obtaining x^3y^2 . Since there are $\binom{5}{3} = 10$ distinct 3-subsets of $\{1, 2, 3, 4, 5\}$, the coefficient of x^3y^2 is 10.

The diagram shows the expansion $(x+y)^5 = (x+y)(x+y)(x+y)(x+y)(x+y)$. The terms are numbered 1 through 5 above each factor. In the first, second, and fifth factors, the x term is circled in red. In the third and fourth factors, the y term is circled in green. Red lines connect the circled x terms to the x^3y^2 term below. Green lines connect the circled y terms to the x^3y^2 term. A handwritten note states: "Coefficient of x^3y^2 is the number of 3-subsets of $\{1, 2, 3, 4, 5\}$ ".

$$(x+y)^5 = (x+y)(x+y)(x+y)(x+y)(x+y)$$

x^3y^2 Coefficient of x^3y^2 is the number of 3-subsets of $\{1, 2, 3, 4, 5\}$

Exercise: Write out an alternative proof of the Binomial Theorem by induction on n , using Lemma 3.5 in the inductive step. Which proof do you find more convincing?

§4: Further Binomial Identities and Balls and Urns

The entry in row n and column r of Pascal's Triangle is $\binom{n}{r}$. Pascal's Triangle can be computed by hand using $\binom{n}{0} = \binom{n}{n} = 1$ and the Fundamental Recurrence.

Lemma 4.1 (Alternating row sums)

If $n \in \mathbf{N}$, $r \in \mathbf{N}_0$ and $r \leq n$ then

$$\sum_{k=0}^r (-1)^k \binom{n}{k} = (-1)^r \binom{n-1}{r}.$$

Lemma 4.2 (Diagonal sums, a.k.a. parallel summation)

If $n \in \mathbf{N}$, $r \in \mathbf{N}_0$ then

$$\sum_{k=0}^r \binom{n+k}{k} = \binom{n+r+1}{r}$$

Pascal's Triangle: entry in row n column k is $\binom{n}{k}$

$n \setminus k$	0	1	2	3	4	5	6	7	8	9	10
0	1										
1	1	1									
2	1	2	1								
3	1	3	3	1							
4	1	4	6	4	1						
5	1	5	10	10	5	1					
6	1	6	15	20	15	6	1				
7	1	7	21	35	35	21	7	1			
8	1	8	28	56	70	56	28	8	1		
9	1	9	36	84	126	126	84	36	9	1	
10	1	10	45	120	210	252	210	120	45	10	1

Lemma 4.1: Alternating Row Sums

$n \setminus k$	0	1	2	3	4	5	6	7	8	9	10
0	1										
1	1	1									
2	1	2	1								
3	1	3	3	1							
4	1	4	6	4	1						
5	1	5	10	10	5	1					
6	1	6	15	20	15	6	1				
7	1	7	21	35	35	21	7	1			
8	1	8	28	56	70	56	28	8	1		
9	1 - 9 + 36 - 84 + 126					126	84	36	9	1	
10	1	10	45	120	210	252	210	120	45	10	1

Lemma 4.2: Alternating Row Sums

$n \backslash k$	0	1	2	3	4	5	6	7	8	9	10
0	1										
1	1	1									
2	1	2	1								
3	1	3	3	1							
4	1	4	6	4	1						
5	1	5	10	10	5	1					
6	1	6	15	20	15	6	1				
7	1	7	21	35	35	21	7	1			
8	1	8	28	56	70	56	28	8	1		
9	1 - 9 + 36 - 84 + 126					126	84	36	9	1	
10	1	10	45	120	210	252	210	120	45	10	1

Lemma 4.2: Diagonal Sums a.k.a. Parallel Summation

$n \setminus k$	0	1	2	3	4	5	6	7	8	9	10
0	1										
1	1	1									
2	1	2	1								
3	1	3	3	1							
4	1	4	6	4	1						
5	1	5	10	10	5	1					
6	1	6	15	20	15	6	1				
7	1	7	21	35	35	21	7	1			
8	1	8	28	56	70	56	28	8	1		
9	1	9	36	84	126	126	84	36	9	1	
10	1	10	45	120	210	252	210	120	45	10	1

Column Sums (see Sheet 1, Question 3)

$n \setminus k$	0	1	2	3	4	5	6	7	8	9	10
0	1										
1	1	1									
2	1	2	1								
3	1	3	3	1							
4	1	4	6	4	1						
5	1	5	10	10	5	1					
6	1	6	15	20	15	6	1				
7	1	7	21	35	35	21	7	1			
8	1	8	28	56	70	56	28	8	1		
9	1	9	36	84	126	126	84	36	9	1	
10	1	10	45	120	210	252	210	120	45	10	1

Arguments with subsets

Lemma 4.3 (Subset of a subset)

If $k, r, n \in \mathbf{N}_0$ and $k \leq r \leq n$ then

$$\binom{n}{r} \binom{r}{k} = \binom{n}{k} \binom{n-k}{r-k}.$$

Lemma 4.4 (Vandermonde's convolution)

If $a, b \in \mathbf{N}_0$ and $m \in \mathbf{N}_0$ then

$$\sum_{k=0}^m \binom{a}{k} \binom{b}{m-k} = \binom{a+b}{m}.$$

Corollaries of the Binomial Theorem

Corollary 4.5

(i) If $n \in \mathbf{N}_0$ then $\sum_{k=0}^n \binom{n}{k} = 2^n$.

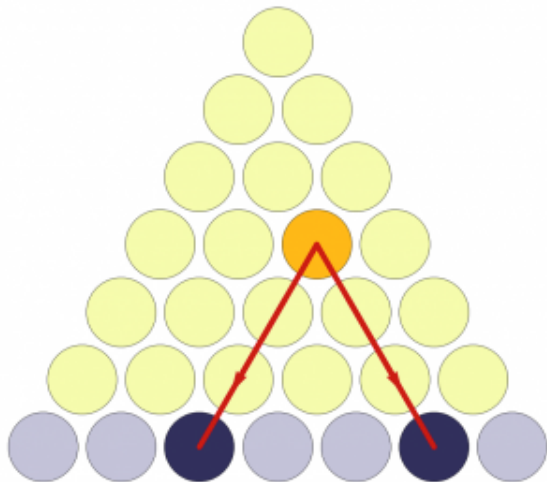
(ii) If $n \in \mathbf{N}$ then $\sum_{k=0}^n (-1)^k \binom{n}{k} = 0$.

Exercise: Find a bijective proof of (i) and a bijective proof of (ii) when n is odd. *Harder exercise:* Is there a bijective proof of (ii) when n is even?

Corollary 4.6

For all $n \in \mathbf{N}$ there are equally many subsets of $\{1, 2, \dots, n\}$ of even size as there are of odd size.

Bijective Proof that $\binom{n+1}{2}$ is the n th Triangle Number



Balls and Urns

How many ways are there to put k balls into n numbered urns?

The answer depends on whether the balls are distinguishable. We may consider urns of unlimited capacity, or urns that can only contain one ball.

	Numbered balls	Indistinguishable balls
≤ 1 ball per urn		
unlimited capacity		

Balls and Urns

How many ways are there to put k balls into n numbered urns?

The answer depends on whether the balls are distinguishable. We may consider urns of unlimited capacity, or urns that can only contain one ball.

	Numbered balls	Indistinguishable balls
≤ 1 ball per urn	$n(n-1)\dots(n-k+1)$	
unlimited capacity		

Balls and Urns

How many ways are there to put k balls into n numbered urns?

The answer depends on whether the balls are distinguishable. We may consider urns of unlimited capacity, or urns that can only contain one ball.

	Numbered balls	Indistinguishable balls
≤ 1 ball per urn	$n(n-1)\dots(n-k+1)$	$\binom{n}{k}$
unlimited capacity		

Balls and Urns

How many ways are there to put k balls into n numbered urns?

The answer depends on whether the balls are distinguishable. We may consider urns of unlimited capacity, or urns that can only contain one ball.

	Numbered balls	Indistinguishable balls
≤ 1 ball per urn	$n(n-1)\dots(n-k+1)$	$\binom{n}{k}$
unlimited capacity	n^k	

Balls and Urns

How many ways are there to put k balls into n numbered urns?

The answer depends on whether the balls are distinguishable. We may consider urns of unlimited capacity, or urns that can only contain one ball.

	Numbered balls	Indistinguishable balls
≤ 1 ball per urn	$n(n-1)\dots(n-k+1)$	$\binom{n}{k}$
unlimited capacity	n^k	$\binom{n+k-1}{k}$

Balls and Urns

How many ways are there to put k balls into n numbered urns?

The answer depends on whether the balls are distinguishable. We may consider urns of unlimited capacity, or urns that can only contain one ball.

	Numbered balls	Indistinguishable balls
≤ 1 ball per urn	$n(n-1)\dots(n-k+1)$	$\frac{n(n-1)\dots(n-k+1)}{k!}$
unlimited capacity	n^k	$\frac{(n+k-1)\dots(n+1)n}{k!}$

Balls and Urns

How many ways are there to put k balls into n numbered urns?

The answer depends on whether the balls are distinguishable. We may consider urns of unlimited capacity, or urns that can only contain one ball.

$k = 2, n = 3$	Numbered balls	Indistinguishable balls
≤ 1 ball per urn	$3 \times 2 = 6$	$\binom{3}{2} = \frac{3 \times 2}{2} = 3$
unlimited capacity	$3 \times 3 = 9$	$\binom{4}{2} = \frac{4 \times 3}{2} = 6$

Unnumbered Balls, Urns of Unlimited Capacity

Theorem 4.7

Let $n \in \mathbf{N}$ and let $k \in \mathbf{N}_0$. The number of ways to place k indistinguishable balls into n urns of unlimited capacity is $\binom{n+k-1}{k}$.

Unnumbered Balls, Urns of Unlimited Capacity

Theorem 4.7

Let $n \in \mathbf{N}$ and let $k \in \mathbf{N}_0$. The number of ways to place k indistinguishable balls into n urns of unlimited capacity is $\binom{n+k-1}{k}$.

$n \backslash k$	0	1	2	3	4	...
1						
2						
3						
4						
5						
\vdots						

Unnumbered Balls, Urns of Unlimited Capacity

Theorem 4.7

Let $n \in \mathbf{N}$ and let $k \in \mathbf{N}_0$. The number of ways to place k indistinguishable balls into n urns of unlimited capacity is $\binom{n+k-1}{k}$.

$n \backslash k$	0	1	2	3	4	...
1	1	1	1	1	1	
2	1					
3	1					
4	1					
5	1					
\vdots						

Unnumbered Balls, Urns of Unlimited Capacity

Theorem 4.7

Let $n \in \mathbf{N}$ and let $k \in \mathbf{N}_0$. The number of ways to place k indistinguishable balls into n urns of unlimited capacity is $\binom{n+k-1}{k}$.

$n \backslash k$	0	1	2	3	4	...
1	1	1	1	1	1	
2	1	2				
3	1					
4	1					
5	1					
\vdots						

Unnumbered Balls, Urns of Unlimited Capacity

Theorem 4.7

Let $n \in \mathbf{N}$ and let $k \in \mathbf{N}_0$. The number of ways to place k indistinguishable balls into n urns of unlimited capacity is $\binom{n+k-1}{k}$.

$n \backslash k$	0	1	2	3	4	...
1	1	1	1	1	1	
2	1	2	3			
3	1	3				
4	1					
5	1					
\vdots						

Unnumbered Balls, Urns of Unlimited Capacity

Theorem 4.7

Let $n \in \mathbf{N}$ and let $k \in \mathbf{N}_0$. The number of ways to place k indistinguishable balls into n urns of unlimited capacity is $\binom{n+k-1}{k}$.

$n \backslash k$	0	1	2	3	4	...
1	1	1	1	1	1	
2	1	2	3	4		
3	1	3	6			
4	1	4				
5	1					
\vdots						

Unnumbered Balls, Urns of Unlimited Capacity

Theorem 4.7

Let $n \in \mathbf{N}$ and let $k \in \mathbf{N}_0$. The number of ways to place k indistinguishable balls into n urns of unlimited capacity is $\binom{n+k-1}{k}$.

$n \backslash k$	0	1	2	3	4	...
1	1	1	1	1	1	
2	1	2	3	4	5	
3	1	3	6	10		
4	1	4	10			
5	1	5				
\vdots						

Unnumbered Balls, Urns of Unlimited Capacity

Theorem 4.7

Let $n \in \mathbf{N}$ and let $k \in \mathbf{N}_0$. The number of ways to place k indistinguishable balls into n urns of unlimited capacity is $\binom{n+k-1}{k}$.

$n \backslash k$	0	1	2	3	4	...
1	1	1	1	1	1	
2	1	2	3	4	5	
3	1	3	6	10	15	
4	1	4	10	20		
5	1	5	15			
\vdots						

Unnumbered Balls, Urns of Unlimited Capacity

Theorem 4.7

Let $n \in \mathbf{N}$ and let $k \in \mathbf{N}_0$. The number of ways to place k indistinguishable balls into n urns of unlimited capacity is $\binom{n+k-1}{k}$.

$n \backslash k$	0	1	2	3	4	...
1	1	1	1	1	1	
2	1	2	3	4	5	
3	1	3	6	10	15	
4	1	4	10	20	35	
5	1	5	15	35		
\vdots						

Unnumbered Balls, Urns of Unlimited Capacity

Theorem 4.7

Let $n \in \mathbf{N}$ and let $k \in \mathbf{N}_0$. The number of ways to place k indistinguishable balls into n urns of unlimited capacity is $\binom{n+k-1}{k}$.

$n \backslash k$	0	1	2	3	4	...
1	1	1	1	1	1	
2	1	2	3	4	5	
3	1	3	6	10	15	
4	1	4	10	20	35	
5	1	5	15	35	70	
\vdots						

Counting n -Tuples with Sum k

The following reinterpretation of Theorem 4.7 is often useful.

Corollary 4.8

Let $n \in \mathbf{N}$ and let $k \in \mathbf{N}_0$. The number of solutions to the equation

$$t_1 + t_2 + \cdots + t_n = k$$

with $t_1, t_2, \dots, t_n \in \mathbf{N}_0$ is $\binom{n+k-1}{k}$.

Questions from Sheet 1

1. Prove that

$$r \binom{n}{r} = n \binom{n-1}{r-1}$$

for $n, r \in \mathbf{N}$ in two ways:

- (a) using the formula for a binomial coefficient;
- (b) by reasoning with subsets.

3. Let $n, r \in \mathbf{N}$. Prove that

$$\binom{r}{r} + \binom{r+1}{r} + \binom{r+2}{r} + \cdots + \binom{n}{r} = \binom{n+1}{r+1}$$

in two ways:

- (a) by induction on n (where r is fixed in the inductive argument);
- (b) by reasoning with subsets of $\{1, 2, \dots, n+1\}$.

§5: Principle of Inclusion and Exclusion

Example 5.1

If A, B, C are subsets of a finite set X then

$$|A \cup B| = |A| + |B| - |A \cap B|$$

$$|\overline{A \cup B}| = |X| - |A| - |B| + |A \cap B|$$

and

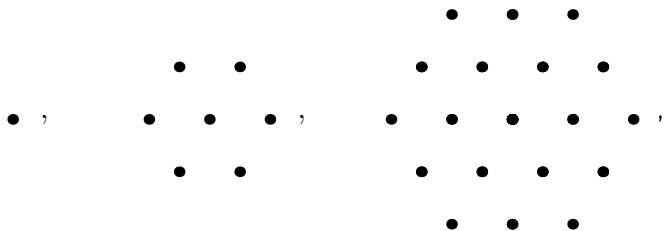
$$\begin{aligned} |A \cup B \cup C| &= |A| + |B| + |C| \\ &\quad - |A \cap B| - |B \cap C| - |C \cap A| + |A \cap B \cap C| \end{aligned}$$

$$\begin{aligned} |\overline{A \cup B \cup C}| &= |X| - |A| - |B| - |C| \\ &\quad + |A \cap B| + |B \cap C| + |C \cap A| - |A \cap B \cap C| \end{aligned}$$

Hexagonal Numbers

Example 5.2

The formula for $|A \cup B \cup C|$ gives a nice way to find a formula for the (centred) hexagonal numbers.



It is easier to find the sizes of the intersections of the three rhombi making up each hexagon than it is to find the sizes of their unions. Whenever intersections are easier to think about than unions, the PIE is likely to work well.

Principle of Inclusion and Exclusion

In general we have finite universe set X and subsets $A_1, A_2, \dots, A_n \subseteq X$. For each non-empty subset $I \subseteq \{1, 2, \dots, n\}$ we define

$$A_I = \bigcap_{i \in I} A_i.$$

By convention we set $A_{\emptyset} = X$.

Theorem 5.3 (Principle of Inclusion and Exclusion)

If A_1, A_2, \dots, A_n are subsets of a finite set X then

$$|\overline{A_1 \cup A_2 \cup \dots \cup A_n}| = \sum_{I \subseteq \{1, 2, \dots, n\}} (-1)^{|I|} |A_I|.$$

Exercise: Check that Theorem 5.3 holds when $n = 1$ and check that it agrees with Example 5.1 when $n = 2$ and $n = 3$.

Principle of Inclusion and Exclusion

In general we have finite universe set X and subsets $A_1, A_2, \dots, A_n \subseteq X$. For each non-empty subset $I \subseteq \{1, 2, \dots, n\}$ we define

$$A_I = \bigcap_{i \in I} A_i.$$

By convention we set $A_{\emptyset} = X$.

Theorem 5.3 (Principle of Inclusion and Exclusion)

If A_1, A_2, \dots, A_n are subsets of a finite set X then

$$|\overline{A_1 \cup A_2 \cup \dots \cup A_n}| = \sum_{I \subseteq \{1, 2, \dots, n\}} (-1)^{|I|} |A_I|.$$

Think of A_i as the set of objects in the universe U having property i . Then the PIE counts all those objects having *none* of the properties P_1, \dots, P_n . If $I = \{i_1, i_2, \dots, i_k\}$ then A_I consists of those objects having (at least) properties i_1, i_2, \dots, i_k .

Application: Counting Prime Numbers

Example 5.4

Let $X = \{1, 2, \dots, 48\}$. We define three subsets of X :

$$B(2) = \{m \in X, m \text{ is divisible by } 2\}$$

$$B(3) = \{m \in X, m \text{ is divisible by } 3\}$$

$$B(5) = \{m \in X, m \text{ is divisible by } 5\}$$

Any composite number ≤ 48 is divisible by either 2, 3 or 5. So

$$\overline{B(2) \cup B(3) \cup B(5)} = \{1\} \cup \{p : 5 < p \leq 48, p \text{ is prime}\}.$$

Counting Prime numbers

Lemma 5.5

Let $r, M \in \mathbf{N}$. There are exactly $\lfloor M/r \rfloor$ numbers in $\{1, 2, \dots, M\}$ that are divisible by r .

Theorem 5.6

Let p_1, \dots, p_n be distinct prime numbers and let $M \in \mathbf{N}$. The number of natural numbers $\leq M$ that are not divisible by any of primes p_1, \dots, p_n is

$$\sum_{I \subseteq \{1, 2, \dots, n\}} (-1)^{|I|} \left\lfloor \frac{M}{\prod_{i \in I} p_i} \right\rfloor.$$

Example 5.7

Let $M = pq$ where p, q are distinct prime numbers. The numbers of natural numbers $\leq pq$ that are coprime to M is

$$M \left(1 - \frac{1}{p}\right) \left(1 - \frac{1}{q}\right)$$

Application: Counting Derangements

Let $n \in \mathbf{N}$. Let X be the set of all permutations of $\{1, 2, \dots, n\}$ and let

$$A_i = \{\sigma \in X : \sigma(i) = i\}.$$

To apply the PIE to count derangements we need this lemma.

Lemma 5.8

(i) *A permutation $\sigma \in X$ is a derangement if and only if*

$$\sigma \in \overline{A_1 \cup A_2 \cup \dots \cup A_n}.$$

(ii) *If $I \subseteq \{1, 2, \dots, n\}$ then A_I consists of all permutations of $\{1, 2, \dots, n\}$ which fix the elements of I . If $|I| = k$ then*

$$|A_I| = (n - k)!.$$

Coulter McDowell Lecture and Imperial Colloquium

Dr Vicky Neale (Cambridge) on

'7 Things you really need to know about prime numbers!'

Time: Wednesday 22nd October (TODAY), 5.30pm (tea/cakes)
for 6.15pm

Place: Windsor Building

Abstract: Prime numbers are fundamentally important in mathematics. Join Dr Vicky Neale to discover some of the beautiful properties of prime numbers, and learn about some of the unsolved problems that mathematicians are working on today.

Departmental Colloquium at Imperial at 17.00 on Thursday by Martin Hairer (2014 Fields Medallist).

“Taming Infinities”

Clare Lecture Theatre.

§6: Rook Polynomials

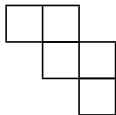
Definition 6.1

A *board* is a subset of the squares of an $n \times n$ grid. Given a board B , we let $r_k(B)$ denote the number of ways to place k rooks on B , so that no two rooks are in the same row or column. Such rooks are said to be *non-attacking*. The *rook polynomial* of B is defined to be

$$f_B(x) = r_0(B) + r_1(B)x + r_2(B)x^2 + \cdots + r_n(B)x^n.$$

Example 6.2

The rook polynomial of the board B below is $1 + 5x + 6x^2 + x^3$.



Examples

Exercise: Let B be a board. Check that $r_0(B) = 1$ and that $r_1(B)$ is the number of squares in B .

Example 6.3

After the recent spate of cutbacks, only four professors remain at the University of Erewhon. Prof. W can lecture courses 1 or 4; Prof. X is an all-rounder and can lecture 2, 3 or 4; Prof. Y refuses to lecture anything except 3; Prof. Z can lecture 1 or 2. If each professor must lecture exactly one course, how many ways are there to assign professors to courses?

Examples

Exercise: Let B be a board. Check that $r_0(B) = 1$ and that $r_1(B)$ is the number of squares in B .

Example 6.3

After the recent spate of cutbacks, only four professors remain at the University of Erewhon. Prof. W can lecture courses 1 or 4; Prof. X is an all-rounder and can lecture 2, 3 or 4; Prof. Y refuses to lecture anything except 3; Prof. Z can lecture 1 or 2. If each professor must lecture exactly one course, how many ways are there to assign professors to courses?

Example 6.4

How many derangements σ of $\{1,2,3,4,5\}$ have the property that $\sigma(i) \neq i + 1$ for $1 \leq i \leq 4$?

Square Boards

Lemma 6.5

The rook polynomial of the $n \times n$ -board is

$$\sum_{k=0}^n k! \binom{n}{k}^2 x^k.$$

Administration and Careers Event

- ▶ Please take the Part B handout and collect your work for Sheet 2.
- ▶ Answers to Sheet 2 are available from Moodle.
- ▶ **Question 2 on Sheet 3 will be used for a peer-marking exercise. Hand in at the lecture on Thursday.**

Lemmas for Calculating Rook Polynomials

The two following lemmas are very useful when calculating rook polynomials.

Lemma 6.6

Let C be a board. Suppose that the squares in C can be partitioned into sets A and B so that no square in A lies in the same row or column as a square of B . Then

$$f_C(x) = f_A(x)f_B(x).$$

Lemma 6.7

Let B be a board and let s be a square in B . Let D be the board obtained from B by deleting s and let E be the board obtained from B by deleting the entire row and column containing s . Then

$$f_B(x) = f_D(x) + xf_E(x).$$

[In printed notes: $f_B(x)$ is misprinted as $f_C(x)$.]

Example of Lemma 6.7

Example 6.8

The rook-polynomial of the boards in Examples 6.3 and 6.4 can be found using Lemma 6.7. For the board in Example 6.3 it works well to apply the lemma first to the square marked 1, then to the square marked 2 (in the new boards).

1	■	■	□
■	2	□	□
■	■	□	■
□	□	■	■

Example 6.8

B

1	■	■	□
■	2	□	□
■	■	□	■
□	□	■	■

Example 6.8

D

■	■	■	□
■	□	□	□
■	■	□	■
□	□	■	■

B

1	■	■	□
■	2	□	□
■	■	□	■
□	□	■	■

Example 6.8

B

1	■	■	□
■	2	□	□
■	■	□	■
□	□	■	■

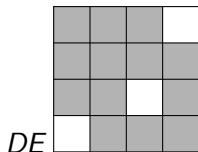
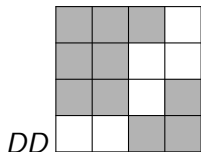
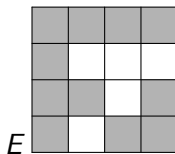
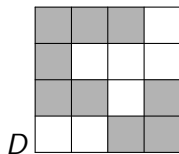
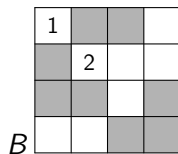
D

■	■	■	□
■	□	□	□
■	■	□	■
□	□	■	■

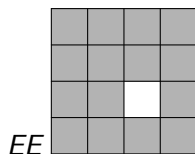
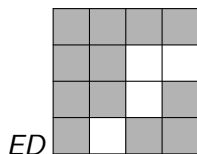
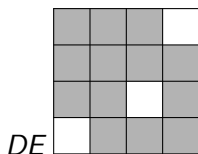
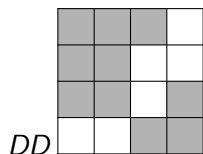
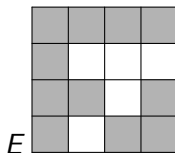
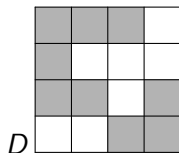
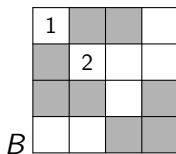
E

■	■	■	■
■	□	□	□
■	■	□	■
■	□	■	■

Example 6.8



Example 6.8



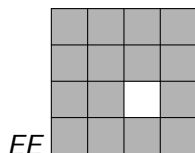
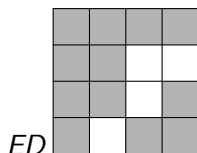
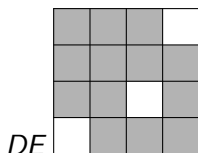
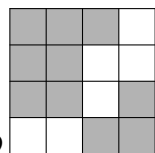
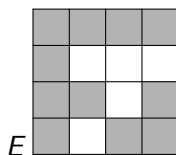
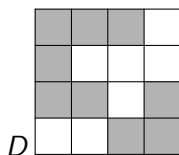
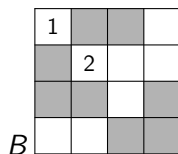
$$(1 + 2x)(1 + 4x + 3x^2)$$

$$(1 + x)^3$$

$$(1 + x)(1 + 3x + x^2)$$

$$1 + x$$

Example 6.8



$$(1 + 2x)(1 + 4x + 3x^2)$$

$$(1 + x)^3$$

$$(1 + x)(1 + 3x + x^2)$$

$$1 + x$$

$$(1 + 2x)(1 + 4x + 3x^2)$$

$$x(1 + x)^3$$

$$x(1 + x)(1 + 3x + x^2)$$

$$x^2(1 + x)$$

Placements on the Complement

Lemma 6.9

Let B be a board contained in an $n \times n$ grid and let $0 \leq k \leq n$. The number of ways to place k red rooks on B and $n - k$ blue rooks anywhere on the grid, so that the n rooks are non-attacking, is $r_k(B)(n - k)!$.

Theorem 6.10

Let B be a board contained in an $n \times n$ grid. Let \bar{B} denote the board formed by all the squares in the grid that are not in B . The number of ways to place n non-attacking rooks on \bar{B} is

$$n! - (n - 1)!r_1(B) + (n - 2)!r_2(B) - \cdots + (-1)^n r_n(B).$$

Part B: Generating Functions

§7: Introduction to Generating Functions

Definition 7.1

The *ordinary generating function* associated to the sequence a_0, a_1, a_2, \dots is the power series

$$\sum_{n=0}^{\infty} a_n x^n = a_0 + a_1 x + a_2 x^2 + \dots .$$

Usually we shall drop the word ‘ordinary’ and just write ‘generating function’.

The sequences we deal with usually have integer entries, and so the coefficients in generating functions will usually be integers.

Sums and Products of Formal Power Series

Let $F(x) = \sum_{n=0}^{\infty} a_n x^n$ and $G(x) = \sum_{n=0}^{\infty} b_n x^n$. Then

- $F(x) + G(x) = \sum_{n=0}^{\infty} (a_n + b_n) x^n$
- $F(x)G(x) = \sum_{n=0}^{\infty} c_n x^n$ where $c_n = \sum_{m=0}^n a_m b_{n-m}$.
- $F'(x) = \sum_{n=0}^{\infty} n a_n x^{n-1}$.

It is also possible to define the reciprocal $1/F(x)$ whenever $a_0 \neq 0$. By far the most important case is the case $F(x) = 1 - x$, when

$$\frac{1}{1-x} = \sum_{n=0}^{\infty} x^n$$

is the usual formula for the sum of a geometric progression.

Analytic and Formal Interpretations.

We can think of a generating function $\sum_{n=0}^{\infty} a_n x^n$ in two ways.
Either:

- As a formal power series with x acting as a place-holder. This is the ‘clothes-line’ interpretation (see Wilf *generatingfunctionology*, page 4), in which we regard the power-series merely as a convenient way to display the terms in our sequence.
- As a function of a real or complex variable x convergent when $|x| < r$, where r is the radius of convergence of $\sum_{n=0}^{\infty} a_n x^n$.

Examples

Example 7.2

How many ways are there to tile a $2 \times n$ path with bricks that are either 1×2 or 2×1 ?

Example 7.3

Let $k \in \mathbf{N}$. Let b_k be the number of 3-tuples (t_1, t_2, t_3) such that $t_1, t_2, t_3 \in \mathbf{N}_0$ and $t_1 + t_2 + t_3 = k$. Will find b_k using generating functions.

To complete the example we needed the following theorem, proved as Question 4 of Sheet 3.

Theorem 7.4

If $n \in \mathbf{N}$ then

$$\frac{1}{(1-x)^n} = \sum_{k=0}^{\infty} \binom{n+k-1}{k} x^k$$

General Binomial Theorem

Theorem 7.5

If $\alpha \in \mathbf{R}$ then

$$(1 + y)^\alpha = \sum_{k=0}^{\infty} \frac{\alpha(\alpha - 1) \dots (\alpha - (k - 1))}{k!} y^k$$

for all y such that $|y| < 1$.

Exercise: Let $\alpha \in \mathbf{Z}$.

- (i) Show that if $\alpha \geq 0$ then Theorem 7.4 agrees with the Binomial Theorem for integer exponents, proved in Theorem 3.6, and with Theorem 7.5.
- (ii) Show that if $\alpha < 0$ then Theorem 7.4 agrees with Question 4 **[not 5 as it says in printed notes]** on Sheet 3. (Substitute $-x$ for y .)

- ▶ Please return peer-marked Sheet 2 Question 2 to lecturer.

§8: Recurrence Relations and Asymptotics

Three step programme for solving recurrences:

- Use the recurrence to write down an equation satisfied by the generating function $F(x) = \sum_{n=0}^{\infty} a_n x^n$;
- Solve the equation to get a closed form for the generating function;
- Use the closed form for the generating function to find a formula for the coefficients.

Example 8.1

Will solve $a_{n+2} = 5a_{n+1} - 6a_n$ for $n \in \mathbf{N}$ subject to the initial conditions $a_0 = A$ and $a_1 = B$, using the three-step programme.

Partial Fractions

Theorem 8.2

Let $f(x)$ and $g(x)$ be polynomials with $\deg f < \deg g$. If

$$g(x) = \alpha(x - 1/\beta_1)^{d_1} \dots (x - 1/\beta_k)^{d_k}$$

where $\alpha, \beta_1, \beta_2, \dots, \beta_k$ are distinct non-zero complex numbers and $d_1, d_2, \dots, d_k \in \mathbf{N}$, then there exist polynomials P_1, \dots, P_k such that $\deg P_i < d_i$ and

$$\frac{f(x)}{g(x)} = \frac{P_1(x)}{(1 - \beta_1 x)^{d_1}} + \dots + \frac{P_k(x)}{(1 - \beta_k x)^{d_k}}.$$

More Examples and Derangements

Example 8.3

Will solve $b_n = 3b_{n-1} - 4b_{n-3}$ for $n \geq 3$.

See also printed notes for end of solution to Example 7.2 (garden paths).

Theorem 8.4

Let $p_n = d_n/n!$ be the probability that a permutation of $\{1, 2, \dots, n\}$, chosen uniformly at random, is a derangement. Then

$$np_n = (n-1)p_{n-1} + p_{n-2}$$

for all $n \geq 2$ and

$$p_n = 1 - \frac{1}{1!} + \frac{1}{2!} - \dots + \frac{(-1)^n}{n!}.$$

Singularities

If G is a power series then a *singularity* of G is a point where G is undefined. For example, if $G(z) = 1/(1 - z^2)$ then G has singularities at $z = 1$ and $z = -1$ and G has no singularities w such that $|w| < 1$.

Theorem 8.5

Let $F(z) = \sum_{n=0}^{\infty} a_n z^n$ be the generating function for the sequence a_0, a_1, a_2, \dots . Fix $R \in \mathbf{R}$. Suppose that F has no singularities w such that $|w| < R$. Then for any $\epsilon > 0$ we have

$$|a_n| \leq \left(\frac{1}{R} + \epsilon\right)^n$$

for all sufficiently large $n \in \mathbf{N}$. Moreover, if F has a singularity w such that $|w| = R$ then there exist infinitely many n such that

$$|a_n| \geq \left(\frac{1}{R} - \epsilon\right)^n.$$

Example of Theorem 8.5

Chocolates are provided today.

Example 8.6

Consider the recurrence relation $a_{n+3} = a_n + a_{n+1} + a_{n+2}$. Step (1) of the three-step programme shows that the generating function for a_n is $F(z) = P(z)/(1 - z - z^2 - z^3)$ for some polynomial $P(z)$. The roots of $1 - z - z^2 - z^3 = 0$ are, to five decimal places,

$$0.543790, \quad 0.7718445 + 1.115143i, \quad 0.7718445 - 1.115143i.$$

So the singularity of $F(z)$ of smallest modulus is at $0.543790\dots$

By Theorem 8.5, $a_n \leq \frac{1}{0.543791^n} \leq 2^n$ for all sufficiently large n .
(Note that the initial values a_0 , a_1 and a_2 were not needed.)

More Interesting Example of Theorem 8.5

Example 8.7

Let $G(z) = \sum_{n=0}^{\infty} p_n z^n$ be the generating function for the proportion of permutations of $\{1, 2, \dots, n\}$ that are derangements. You should have found that

$$G(z) = \frac{\exp(-z)}{1-z}.$$

More Interesting Example of Theorem 8.5

Example 8.7

Let $G(z) = \sum_{n=0}^{\infty} p_n z^n$ be the generating function for the proportion of permutations of $\{1, 2, \dots, n\}$ that are derangements. You should have found that

$$G(z) = \frac{\exp(-z)}{1-z}.$$

Take out the part of $G(z)$ responsible for the singularity at $z = 1$

$$G(z) = \frac{e^{-1}}{1-z} - \frac{e^{-1} - e^{-z}}{1-z}.$$

We now apply Theorem 8.5 to the non-singular part.

§9: Convolutions and the Catalan Numbers

The problems in this section fit into the following pattern: suppose that \mathcal{A} , \mathcal{B} and \mathcal{C} are classes of combinatorial objects and that each object has a *size* in \mathbf{N}_0 . Write $\text{size}(X)$ for the size of X . Suppose that there are finitely many objects of any given size.

Let a_n , b_n and c_n denote the number of objects of size n in \mathcal{A} , \mathcal{B} , \mathcal{C} , respectively.

Theorem 9.1

Suppose there is a bijection

$$\left\{ Z \in \mathcal{C} : \text{size}(Z) = n \right\} \leftrightarrow \left\{ (X, Y) : \begin{array}{l} X \in \mathcal{A}, Y \in \mathcal{B} \\ \text{size}(X) + \text{size}(Y) = n \end{array} \right\}$$

Then

$$\sum_{n=0}^{\infty} c_n x^n = \left(\sum_{n=0}^{\infty} a_n x^n \right) \left(\sum_{n=0}^{\infty} b_n x^n \right)$$

Convolutions and First Example

The critical step in the proof is to show that

$$c_n = a_0 b_n + a_1 b_{n-1} + \cdots + a_{n-1} b_1 + a_n b_0 = \sum_{m=0}^n a_m b_{n-m}.$$

If sequences (a_n) , (b_n) and (c_n) satisfy this relation then we say that (c_n) is the *convolution* of (a_n) and (b_n) .

Example 9.2

The grocer sells indistinguishable apples and bananas in unlimited quantities. Bananas are only sold in bunches of three.

- (a) What is the generating function for the number of ways to buy n pieces of fruit?
- (b) How would your answer to (a) change if dates are also sold?
- (c) Let c_n be the number of ways to buy n pieces of fruit and then to donate some number of the apples just purchased to the Students' Union. Find the generating function $\sum_{n=0}^{\infty} c_n x^n$.

Example 9.3

Lemma 6.6 on rook placements states that if C is a board that A and B where no square in A lies in the same row or column as a square in B has a very short proof using Theorem 9.1.

Exercise: Show tha splitting a non-attacking placement of rooks on C into the placements on the sub-boards A and B gives a bijection satisfying the hypotheses of Theorem 9.1. (Define the size of a rook placement and the sets \mathcal{A} , \mathcal{B} , \mathcal{C} .) Hence prove Lemma 6.6.

Lemma 6.6

Let C be a board. Suppose that the squares in C can be partitioned into sets A and B so that no square in A lies in the same row or column as a square of B . Then

$$f_C(x) = f_A(x)f_B(x).$$

Rooted Binary Trees

Definition 9.4

A rooted binary tree is either empty, or consists of a *root vertex* together with a pair of rooted binary trees: a *left subtree* and a *right subtree*. The *Catalan number* C_n is the number of rooted binary trees on n vertices.

Theorem 9.5

If $n \in \mathbf{N}_0$ then $C_n = \frac{1}{n+1} \binom{2n}{n}$.

Bijection in Step (a) of three-step programme.

- ▶ Let \mathcal{C} be the set of all rooted binary trees
- ▶ Let \mathcal{T} be the set of all non-empty rooted binary trees.

Define the size of a rooted binary tree T to be its number of vertices. Now define a bijection

$$\mathcal{T} \rightarrow \{\bullet\} \times \mathcal{C} \times \mathcal{C}.$$

and apply Theorem 9.1.

Exercise

A resident of Flatland (see *Flatland: A Romance of Many Dimensions*, Edwin A. Abbott 1884) is given an enormous number of indistinguishable 1×1 square bricks for his birthday. Let t_n be the number of ways to make a 'T' shape at least three bricks high and at least two bricks across.

Exercise

A resident of Flatland (see *Flatland: A Romance of Many Dimensions*, Edwin A. Abbott 1884) is given an enormous number of indistinguishable 1×1 square bricks for his birthday. Let t_n be the number of ways to make a 'T' shape at least three bricks high and at least two bricks across.

Show that the generating function for t_n is

$$\sum_{n=0}^{\infty} t_n x^n = x^2(1 + x + x^2 + \cdots)x^2(1 + x + x^2 + \cdots)$$

by decomposing a 'T' shape into a vertical part (stopping below the horizontal) containing at least two bricks and a horizontal part containing at least two bricks, and applying Theorem 9.1. Hence

$$\sum_{n=0}^{\infty} t_n x^n = \frac{x^2}{1-x} \frac{x^2}{1-x} = \frac{x^4}{(1-x)^2}.$$

Quiz

Suppose instead an 'C' shape is required, at least three bricks high and at least two bricks across, having reflective symmetry. Let c_n be the number of 'C's made using n bricks. Find a closed form for

$$C(x) = \sum_{n=0}^{\infty} c_n x^n.$$

Quiz

Suppose instead an 'C' shape is required, at least three bricks high and at least two bricks across, having reflective symmetry. Let c_n be the number of 'C's made using n bricks. Find a closed form for $C(x) = \sum_{n=0}^{\infty} c_n x^n$.

A: $G(x) = \frac{x^7}{(1-x)^3}$

B: $\frac{x^5}{(1-x)^3}$

C: $G(x) = \frac{x^7}{(1-x)(1-x^2)}$

D: $\frac{x^5}{(1-x)(1-x^2)}$

Quiz

Suppose instead an 'C' shape is required, at least three bricks high and at least two bricks across, having reflective symmetry. Let c_n be the number of 'C's made using n bricks. Find a closed form for $C(x) = \sum_{n=0}^{\infty} c_n x^n$.

A: $G(x) = \frac{x^7}{(1-x)^3}$

B: $\frac{x^5}{(1-x)^3}$

C: $G(x) = \frac{x^7}{(1-x)(1-x^2)}$

D: $\frac{x^5}{(1-x)(1-x^2)}$

How would your answers to both parts change if bricks came in two colours (but were otherwise still indistinguishable)?

Quiz

Suppose instead an 'C' shape is required, at least three bricks high and at least two bricks across, having reflective symmetry. Let c_n be the number of 'C's made using n bricks. Find a closed form for $C(x) = \sum_{n=0}^{\infty} c_n x^n$.

A: $G(x) = \frac{x^7}{(1-x)^3}$

B: $\frac{x^5}{(1-x)^3}$

C: $G(x) = \frac{x^7}{(1-x)(1-x^2)}$

D: $\frac{x^5}{(1-x)(1-x^2)}$

How would your answers to both parts change if bricks came in two colours (but were otherwise still indistinguishable)?

Answers: $C(x) = \frac{x^5}{(1-x)(1-x^2)}$ for original problem, $C(2x)$ if two colours available.

Derangements by Convolution

Lemma 9.6

If $n \in \mathbf{N}_0$ then

$$\sum_{k=0}^n \binom{n}{k} d_{n-k} = n!.$$

The sum in the lemma becomes a convolution after a small amount of rearranging.

Theorem 9.7

If $G(x) = \sum_{n=0}^{\infty} d_n x^n / n!$ then

$$G(x) \exp(x) = \frac{1}{1-x}.$$

It is now easy to deduce the formula for d_n ; the argument needed is the same as the final step in the proof of Theorem 8.4. The generating function G used above is an example of an *exponential generating function*.

Seminars Today

- ▶ **Maura Paterson**, *Combinatorial properties and applications of algebraic manipulation detection codes*, 2pm in C219
- ▶ **Mark Wildon**, *Open problems on partitions and permutations*, 4pm in IN007.

§10: Partitions

Definition 10.1

A *partition* of a number $n \in \mathbf{N}_0$ is a sequence of natural numbers $(\lambda_1, \lambda_2, \dots, \lambda_k)$ such that

- (i) $\lambda_1 \geq \lambda_2 \geq \dots \geq \lambda_k \geq 1$.
- (ii) $\lambda_1 + \lambda_2 + \dots + \lambda_k = n$.

The entries in a partition λ are called the *parts* of λ . Let $p(n)$ be the number of partitions of n .

Example 10.2

Let a_n be the number of ways to pay for an item costing n pence using only 2p and 5p coins. Equivalently, a_n is the number of partitions of n into parts of size 2 and size 5. Will find the generating function for a_n .

Generating function

Theorem 10.3

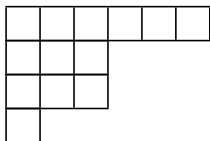
The generating function for $p(n)$ is

$$\sum_{n=0}^{\infty} p(n)x^n = \frac{1}{(1-x)(1-x^2)(1-x^3)\dots}$$

Young Diagrams

It is often useful to represent partitions by *Young diagrams*. The Young diagram of $(\lambda_1, \dots, \lambda_k)$ is an array of boxes left-aligned such that **there are exactly λ_i boxes in row i for each $i \in \{1, \dots, k\}$** .

For example, the Young diagram of $(6, 3, 3, 1)$ is



Theorem 10.4

Let $n \in \mathbf{N}$ and let $k \leq n$. The number of partitions of n into parts of size $\leq k$ is equal to the number of partitions of n with at most k parts.

Two results from generating functions

While there are bijective proofs of the next theorem, it is much easier to prove it using generating functions.

Theorem 10.5

Let $n \in \mathbf{N}$. The number of partitions of n with at most one part of any given size is equal to the number of partitions of n into odd parts.

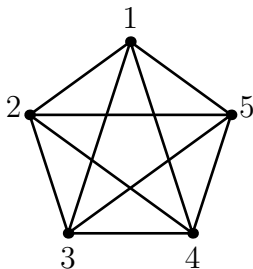
Part C: Ramsey Theory

§11: Introduction to Ramsey Theory

Definition 11.1

A *graph* consists of a set V of vertices together with a set E of 2-subsets of V called *edges*. The *complete graph* with vertex set V is the graph whose edge set is all 2-subsets of V .

The complete graph on $V = \{1, 2, 3, 4, 5\}$ is:



Colourings

Definition 11.2

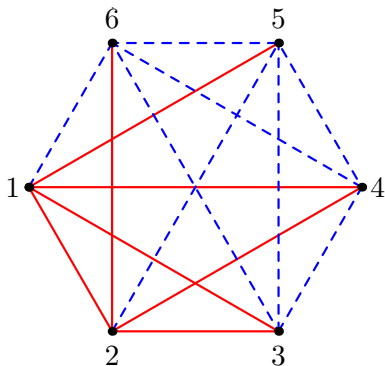
Let $c, n \in \mathbf{N}$. A c -colouring of the complete graph K_n is a function from the edge set of K_n to $\{1, 2, \dots, c\}$. If S is an s -subset of the vertices of K_n such that all the edges between vertices in S have the same colour, then we say that S is a *monochromatic K_s* .

Colourings

Definition 11.2

Let $c, n \in \mathbf{N}$. A c -colouring of the complete graph K_n is a function from the edge set of K_n to $\{1, 2, \dots, c\}$. If S is an s -subset of the vertices of K_n such that all the edges between vertices in X have the same colour, then we say that S is a *monochromatic K_s*

Exercise: find all red K_3 s and blue K_4 s in this colouring of K_6 :

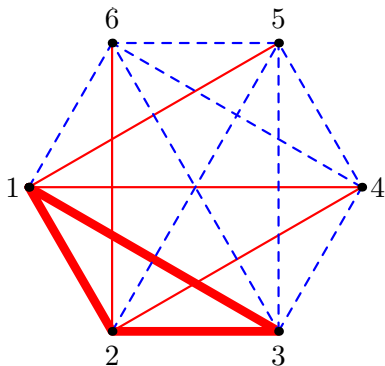


Colourings

Definition 11.2

Let $c, n \in \mathbf{N}$. A c -colouring of the complete graph K_n is a function from the edge set of K_n to $\{1, 2, \dots, c\}$. If S is an s -subset of the vertices of K_n such that all the edges between vertices in X have the same colour, then we say that S is a *monochromatic K_s*

Exercise: find all red K_3 s and blue K_4 s in this colouring of K_6 :

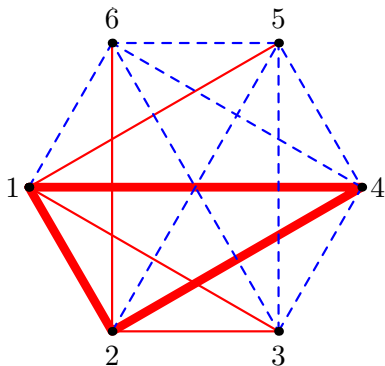


Colourings

Definition 11.2

Let $c, n \in \mathbf{N}$. A c -colouring of the complete graph K_n is a function from the edge set of K_n to $\{1, 2, \dots, c\}$. If S is an s -subset of the vertices of K_n such that all the edges between vertices in X have the same colour, then we say that S is a *monochromatic K_s*

Exercise: find all red K_3 s and blue K_4 s in this colouring of K_6 :

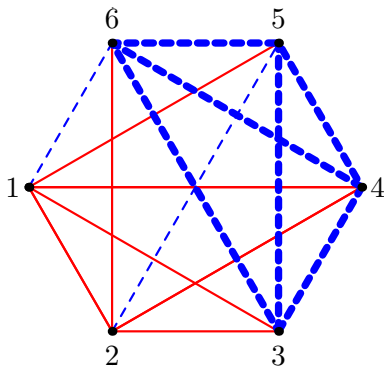


Colourings

Definition 11.2

Let $c, n \in \mathbf{N}$. A c -colouring of the complete graph K_n is a function from the edge set of K_n to $\{1, 2, \dots, c\}$. If S is an s -subset of the vertices of K_n such that all the edges between vertices in X have the same colour, then we say that S is a *monochromatic K_s*

Exercise: find all red K_3 s and blue K_4 s in this colouring of K_6 :

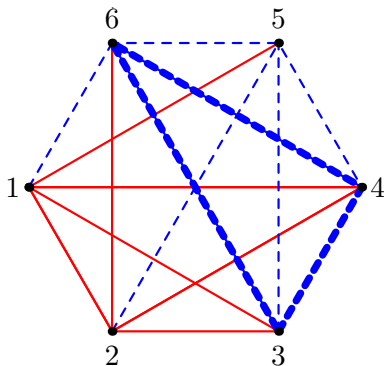


Colourings

Definition 11.2

Let $c, n \in \mathbf{N}$. A c -colouring of the complete graph K_n is a function from the edge set of K_n to $\{1, 2, \dots, c\}$. If S is an s -subset of the vertices of K_n such that all the edges between vertices in X have the same colour, then we say that S is a *monochromatic K_s*

Exercise: find all red K_3 s and blue K_4 s in this colouring of K_6 :

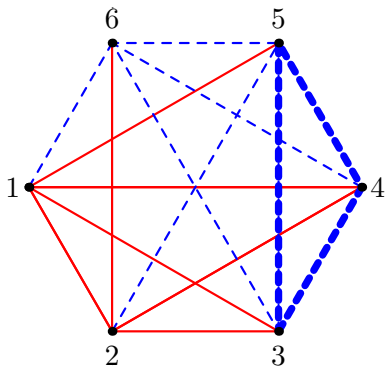


Colourings

Definition 11.2

Let $c, n \in \mathbf{N}$. A c -colouring of the complete graph K_n is a function from the edge set of K_n to $\{1, 2, \dots, c\}$. If S is an s -subset of the vertices of K_n such that all the edges between vertices in X have the same colour, then we say that S is a *monochromatic K_s*

Exercise: find all red K_3 s and blue K_4 s in this colouring of K_6 :



In any Room with Six People . . .

Example 11.3

In any red-blue colouring of the edges of K_6 there is either a red triangle or a blue triangle.

In any Room with Six People . . .

Example 11.3

In any red-blue colouring of the edges of K_6 there is either a red triangle or a blue triangle.

Definition 11.4

Given $s, t \in \mathbf{N}$, with $s, t \geq 2$, we define the Ramsey number $R(s, t)$ to be the smallest n (if one exists) such that in any red-blue colouring of the complete graph on n vertices, there is either a red K_s or a blue K_t .

In any Room with Six People . . .

Example 11.3

In any red-blue colouring of the edges of K_6 there is either a red triangle or a blue triangle.

Definition 11.4

Given $s, t \in \mathbf{N}$, with $s, t \geq 2$, we define the Ramsey number $R(s, t)$ to be the smallest n (if one exists) such that in any red-blue colouring of the complete graph on n vertices, there is either a red K_s or a blue K_t .

Lemma 11.5

Let $s, t \in \mathbf{N}$ with $s, t \geq 2$. Let $N \in \mathbf{N}$. Assume that $R(s, t)$ exists.

- (i) If $N < R(s, t)$ there exist colourings of K_N with no red K_s or blue K_t .
- (ii) If $N < R(s, t)$ there exist colourings of K_N with no red K_s or blue K_t .

$$R(3, 4) \leq 10$$

Lemma 11.6

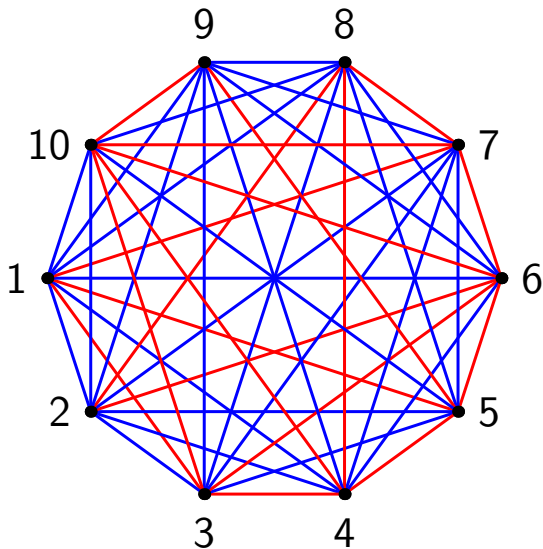
For any $s \in \mathbf{N}$ we have $R(s, 2) = R(2, s) = s$.

The main idea need to prove the existence of all the Ramsey Numbers $R(s, t)$ appears in the next example.

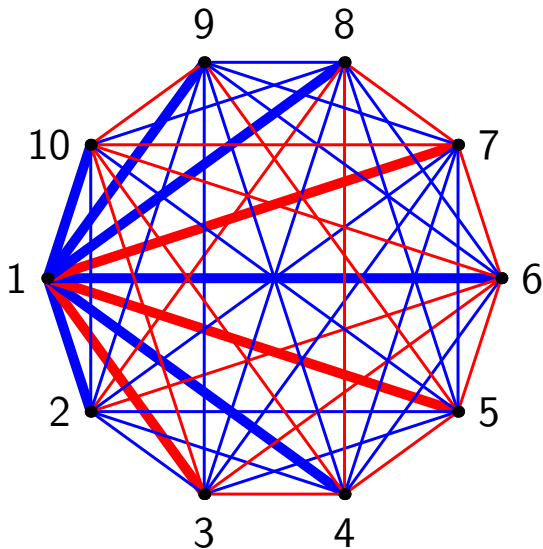
Example 11.7

In any two-colouring of K_{10} there is either a red K_3 or a blue K_4 .
Hence $R(3, 4) \leq 10$.

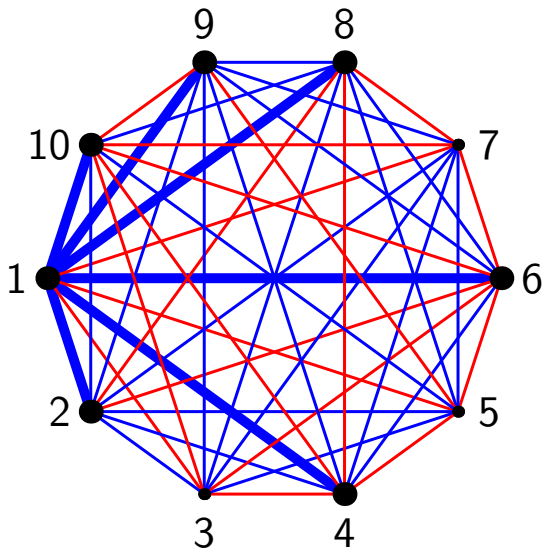
Example $R(3, 4) \leq 10$



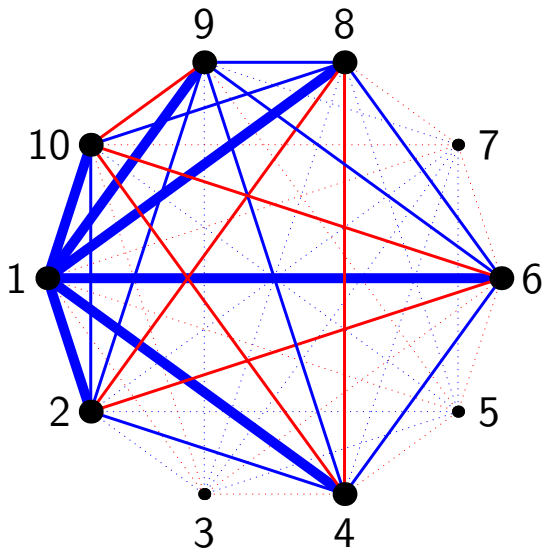
Example $R(3, 4) \leq 10$



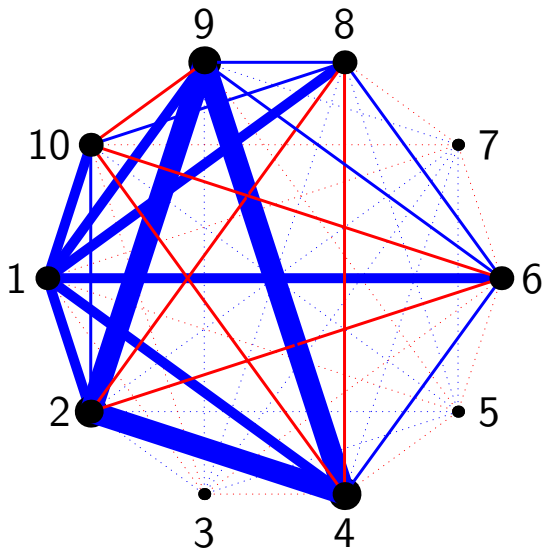
Example $R(3, 4) \leq 10$



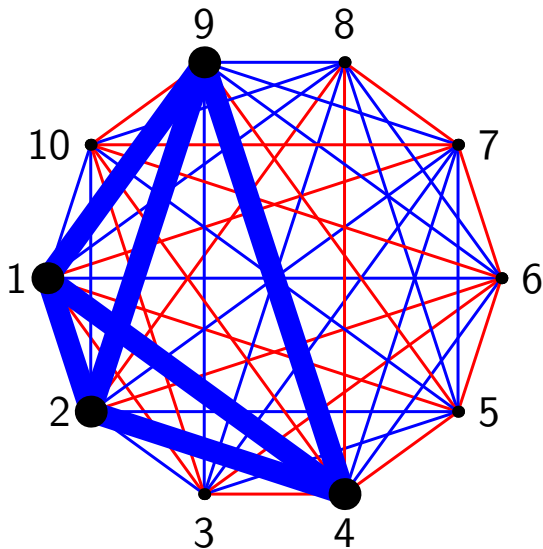
Example $R(3, 4) \leq 10$



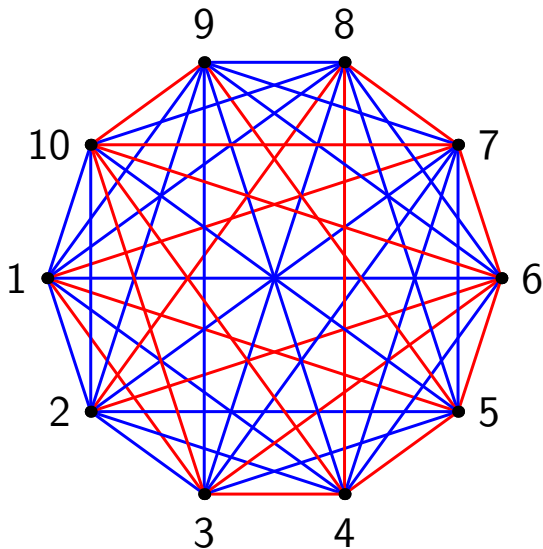
Example $R(3, 4) \leq 10$



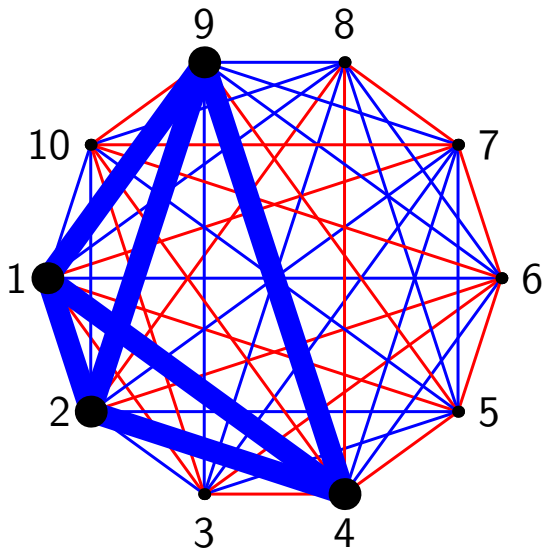
Example $R(3, 4) \leq 10$



Example $R(3, 4) \leq 10$



Example $R(3, 4) \leq 10$



$$R(3, 4) = 9$$

Lemma 11.8 (Hand-Shaking Lemma)

Let G be a graph with vertex set $\{1, 2, \dots, n\}$ and exactly e edges. If d_x is the degree of vertex x then

$$2e = d_1 + d_2 + \dots + d_n.$$

In particular, the number of vertices of odd degree is even.

Theorem 11.9

$$R(3, 4) = 9.$$

The red-blue colouring of K_8 used to show that $R(3, 4) > 8$ is a special case of a more general construction: see Question 3 on Sheet 7.

Theorem 11.10

$$R(4, 4) \leq 18.$$

§12: Ramsey's Theorem

We shall prove by induction on $s + t$ that $R(s, t)$ exists. To make the induction go through we must prove a stronger result giving an upper bound on $R(s, t)$.

Lemma 12.1

Let $s, t \in \mathbf{N}$ with $s, t \geq 3$. If $R(s - 1, t)$ and $R(s, t - 1)$ exist then $R(s, t)$ exists and

$$R(s, t) \leq R(s - 1, t) + R(s, t - 1).$$

Theorem 12.2

For any $s, t \in \mathbf{N}$ with $s, t \geq 2$, the Ramsey number $R(s, t)$ exists and

$$R(s, t) \leq \binom{s + t - 2}{s - 1}.$$

Inductive Proof of Ramsey's Theorem

$s \backslash t$	2	3	4	5	6	...
2						
3						
4						
5						
6						
\vdots						

Inductive Proof of Ramsey's Theorem

$s \backslash t$	2	3	4	5	6	...
2	2	3	4	5	6	...
3	3					
4	4					
5	5					
6	6					
\vdots	\vdots					

Base case: $R(2, s) = R(s, 2) = s$ for all $s \geq 2$.

Inductive Proof of Ramsey's Theorem

$s \backslash t$	2	3	4	5	6	...
2	2	3	4	5	6	...
3	3	6				
4	4					
5	5					
6	6					
\vdots	\vdots					

Base case: $R(2, s) = R(s, 2) = s$ for all $s \geq 2$.

Inductive step by Lemma 13.1

Inductive Proof of Ramsey's Theorem

$s \backslash t$	2	3	4	5	6	...
2	2	3	4	5	6	...
3	3	6	10			
4	4	10				
5	5					
6	6					
\vdots	\vdots					

Base case: $R(2, s) = R(s, 2) = s$ for all $s \geq 2$.

Inductive step by Lemma 13.1

Inductive Proof of Ramsey's Theorem

$s \backslash t$	2	3	4	5	6	...
2	2	3	4	5	6	...
3	3	6	10	15		
4	4	10	20			
5	5	15				
6	6					
\vdots	\vdots					

Base case: $R(2, s) = R(s, 2) = s$ for all $s \geq 2$.

Inductive step by Lemma 13.1

Inductive Proof of Ramsey's Theorem

$s \backslash t$	2	3	4	5	6	...
2	2	3	4	5	6	...
3	3	6	10	15	21	
4	4	10	20	35		
5	5	15	35			
6	6	21				
\vdots	\vdots					

Base case: $R(2, s) = R(s, 2) = s$ for all $s \geq 2$.

Inductive step by Lemma 13.1

Inductive Proof of Ramsey's Theorem

$s \backslash t$	2	3	4	5	6	...
2	2	3	4	5	6	...
3	3	6	10	15	21	
4	4	10	20	35	56	
5	5	15	35	70		
6	6	21	56			
\vdots	\vdots					

Base case: $R(2, s) = R(s, 2) = s$ for all $s \geq 2$.

Inductive step by Lemma 13.1

Inductive Proof of Ramsey's Theorem

$s \backslash t$	2	3	4	5	6	...
2	2	3	4	5	6	...
3	3	6	10	15	21	
4	4	10	20	35	56	
5	5	15	35	70	126	
6	6	21	56	126		
\vdots	\vdots					

Base case: $R(2, s) = R(s, 2) = s$ for all $s \geq 2$.

Inductive step by Lemma 13.1

Inductive Proof of Ramsey's Theorem

$s \backslash t$	2	3	4	5	6	...
2	2	3	4	5	6	...
3	3	6	10	15	21	
4	4	10	20	35	56	
5	5	15	35	70	126	
6	6	21	56	126	252	
\vdots	\vdots					

Base case: $R(2, s) = R(s, 2) = s$ for all $s \geq 2$.

Inductive step by Lemma 13.1

Inductive Proof of Ramsey's Theorem

$s \setminus t$	2	3	4	5	6	...
2	2	3	4	5	6	...
3	3	6	9	14	18	
4	4	9	18	25	41	
5	5	14	25	49	87	
6	6	18	41	87	143	
⋮	⋮					

Base case: $R(2, s) = R(s, 2) = s$ for all $s \geq 2$.

Inductive step by Lemma 13.1

Best known **upper bounds** and **lower bounds** (black if Ramsey number known exactly)

Inductive Proof of Ramsey's Theorem

$s \backslash t$	2	3	4	5	6	...
2	2	3	4	5	6	...
3	3	6	9	14	18	
4	4	9	18	25	35	
5	5	14	25	43	58	
6	6	18	35	58	102	
\vdots	\vdots					

Base case: $R(2, s) = R(s, 2) = s$ for all $s \geq 2$.

Inductive step by Lemma 13.1

Best known **upper bounds** and **lower bounds** (black if Ramsey number known exactly)

Diagonal Ramsey Numbers

Corollary 12.3

If $s \in \mathbf{N}$ and $s \geq 2$ then

$$R(s, s) \leq \binom{2s-2}{s-1} \leq 4^{s-1}.$$

Games and Multiple Colours

Red and **Blue** play a game. **Red** starts by drawing a red line between two corners of a hexagon, then **Blue** draws a blue line and so on. A player *loses* if they makes a triangle of their colour.

Exercise: can the game end in a draw?

Games and Multiple Colours

Red and **Blue** play a game. **Red** starts by drawing a red line between two corners of a hexagon, then **Blue** draws a blue line and so on. A player *loses* if they makes a triangle of their colour.

Exercise: can the game end in a draw?

Theorem 12.4

There exists $n \in \mathbf{N}$ such that if the edges of K_n are coloured red, blue and yellow then there exists a monochromatic triangle.

Sheet 6

1. Let a_n be the number of partitions of $n \in \mathbf{N}$ into parts of size 3 and 5.
- (a) Show that $a_{15} = 2$ and find a_{14} and a_{16} .
- (b) Explain why

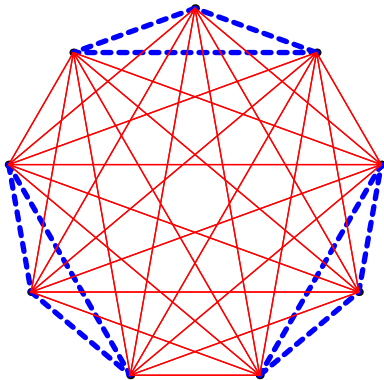
$$\sum_{n=0}^{\infty} a_n x^n = \frac{1}{(1-x^3)(1-x^5)}.$$

- (c) Let c_n be the number of partitions with parts of sizes 3 and 5 whose sum of parts is *at most* n . Find the generating function of c_n .
2. Let b_n be the number of partitions of n that have at most one part of each odd size. For example, $b_6 = 5$: the relevant partitions are (6) , $(5, 1)$, $(4, 2)$, $(3, 2, 1)$, $(2, 2, 2)$. Express the generating function $\sum_{n=0}^{\infty} b_n x^n$ as an infinite product.

5. Let $s, t \geq 2$. By constructing a suitable red-blue colouring of $K_{(s-1)(t-1)}$ prove that $R(s, t) > (s - 1)(t - 1)$. [*Hint: start by partitioning the vertices into $s - 1$ blocks each of size $t - 1$. Colour edges within each block with one colour ...*]

5. Let $s, t \geq 2$. By constructing a suitable red-blue colouring of $K_{(s-1)(t-1)}$ prove that $R(s, t) > (s-1)(t-1)$. [Hint: start by partitioning the vertices into $s-1$ blocks each of size $t-1$. Colour edges within each block with one colour ...]

Example for $s = t = 4$.



Part D: Probabilistic Methods

§13: Revision of Discrete Probability

Definition 13.1

- A *probability measure* p on a finite set Ω assigns a real number p_ω to each $\omega \in \Omega$ so that $0 \leq p_\omega \leq 1$ for each ω and

$$\sum_{\omega \in \Omega} p_\omega = 1.$$

We say that p_ω is the *probability of* ω .

- A *probability space* is a finite set Ω equipped with a probability measure. The elements of a probability space are sometimes called *outcomes*.
- An *event* is a subset of Ω .
- The *probability* of an event $A \subseteq \Omega$, denoted $\mathbf{P}[A]$ is the sum of the probability of the outcomes in A ; that is $\mathbf{P}[A] = \sum_{\omega \in A} p_\omega$.

Example 13.2: Probability Spaces

- (1) To model a throw of a single unbiased die, we take

$$\Omega = \{1, 2, 3, 4, 5, 6\}$$

and put $p_\omega = 1/6$ for each outcome $\omega \in \Omega$. The event that we throw an even number is $A = \{2, 4, 6\}$ and as expected, $\mathbf{P}[A] = p_2 + p_4 + p_6 = 1/6 + 1/6 + 1/6 = 1/2$.

- (2) To model a throw of a pair of dice we could take

$$\Omega = \{1, 2, 3, 4, 5, 6\} \times \{1, 2, 3, 4, 5, 6\}$$

and give each element of Ω probability $1/36$, so $p_{(i,j)} = 1/36$ for all $(i,j) \in \Omega$. Alternatively, if we know we only care about the sum of the two dice, we could take $\Omega = \{2, 3, \dots, 12\}$ with

n	2	3	...	6	7	8	...	12
p_n	1/36	2/36	...	5/36	6/36	5/36	...	1/36

The former is natural and more flexible.

Example 13.2: Probability Spaces

- (3) A suitable probability space for three flips of a coin is

$$\Omega = \{HHH, HHT, HTH, HTT, THH, THT, TTH, TTT\}$$

where H stands for heads and T for tails, and each outcome has probability $1/8$. To allow for a biased coin we fix $0 \leq q \leq 1$ and instead give an outcome with exactly k heads probability $q^k(1 - q)^{3-k}$.

Exercise: Let A be the event that there is at least one head, and let B be the event that there is at least one tail. Find $\mathbf{P}[A]$, $\mathbf{P}[B]$, $\mathbf{P}[A \cap B]$, $\mathbf{P}[A \cup B]$.

- (4) Let $n \in \mathbf{N}$ and let Ω be the set of all permutations of $\{1, 2, \dots, n\}$. Set $p_\sigma = 1/n!$ for each permutation $\sigma \in \Omega$. This gives a suitable setup for Theorem 2.6.

Feedback

- ▶ 'What worked well: the lectures are very clear and the lecturer explained all the topics clearly. The problem sheets could have fewer questions.'
- ▶ 'Asking lecturer for help when stuck', and 'Please do more bijective proofs'.
- ▶ *Aspect of the course that most helped you:*
 - ▶ 'The lectures and homework',
 - ▶ 'extra problems',
 - ▶ 'the problem sheets and extra questions'.
- ▶ 'I think Part A was too big and Parts B and C should be increased in size'.
- ▶ 'Don't feel like the homework related to a lot of the examples in the notes so struggled to answer the questions'.
- ▶ 'This was a very stimulating course with a lot of challenging material. The lecturer explained it well.'
- ▶ 'Interesting proofs and engaging examples that were interesting to help and understand the proofs'.

Conditional Probability

Definition 13.3

Let Ω be a probability space, and let $A, B \subseteq \Omega$ be events.

- If $\mathbf{P}[B] \neq 0$ then we define the *conditional probability of A given B* by

$$\mathbf{P}[A|B] = \frac{\mathbf{P}[A \cap B]}{\mathbf{P}[B]}.$$

- The events A, B are said to be *independent* if

$$\mathbf{P}[A \cap B] = \mathbf{P}[A]\mathbf{P}[B].$$

Exercise: Let $\Omega = \{HH, HT, TH, TT\}$ be the probability space for two flips of a fair coin. Let A be the event that both flips are heads, and let B be the event that at least one flip is a head. Write A and B as subsets of Ω and show that $\mathbf{P}[A|B] = 1/3$.

The Most Misunderstood Problem Ever?

Example 13.4 (The Monty Hall Problem)

On a game show you are offered the choice of three doors. Behind one door is a car, and behind the other two are goats. You pick a door and then the host, *who knows where the car is*, opens another door to reveal a goat. You may then either open your original door, or change to the remaining unopened door. Assuming you want the car, should you change?

More Examples of Conditional Probability

Example 13.5 (Sleeping Beauty)

Beauty is told that if a coin lands heads she will be woken on Monday and Tuesday mornings, but after being woken on Monday she will be given an amnesia inducing drug, so that she will have no memory of what happened that day. If the coin lands tails she will only be woken on Tuesday morning. At no point in the experiment will Beauty be told what day it is. Imagine that you are Beauty and are awoken as part of the experiment and asked for your credence that the coin landed heads. What is your answer?

Example 13.6

Suppose that one in every 1000 people has disease X . There is a new test for X that will always identify the disease in anyone who has it. There is, unfortunately, a tiny probability of $1/250$ that the test will falsely report that a healthy person has the disease. What is the probability that a person who tests positive for X actually has the disease?

Random Variables

Definition 13.7

Let Ω be a probability space. A *random variable* on Ω is a function $X : \Omega \rightarrow \mathbf{R}$.

Definition 13.8

If $X, Y : \Omega \rightarrow \mathbf{R}$ are random variables then we say that X and Y are *independent* if for all $x, y \in \mathbf{R}$ the events

$$A = \{\omega \in \Omega : X(\omega) = x\} \quad \text{and}$$

$$B = \{\omega \in \Omega : Y(\omega) = y\}$$

are independent.

If $X : \Omega \rightarrow \mathbf{R}$ is a random variable, then ' $X = x$ ' is the event $\{\omega \in \Omega : X(\omega) = x\}$. We mainly use this shorthand in probabilities, so for instance

$$\mathbf{P}[X = x] = \mathbf{P}[\{\omega \in \Omega : X(\omega) = x\}].$$

Example of Independence of Random Variables

Example 13.9

Let $\Omega = \{HH, HT, TH, TT\}$ be the probability space for two flips of a fair coin. Define $X : \Omega \rightarrow \mathbf{R}$ to be 1 if the first coin is heads, and zero otherwise. So

$$X(HH) = X(HT) = 1 \quad \text{and} \quad X(TH) = X(TT) = 0.$$

Define $Y : \Omega \rightarrow \mathbf{R}$ similarly for the second coin.

- (i) The random variables X and Y are independent.
- (ii) Let Z be 1 if exactly one flip is heads, and zero otherwise. Then X and Z are independent, and Y and Z are independent.
- (iii) There exist $x, y, z \in \{0, 1\}$ such that

$$\mathbf{P}[X = x, Y = y, Z = z] \neq \mathbf{P}[X = x]\mathbf{P}[Y = y]\mathbf{P}[Z = z].$$

Expectation

Definition 13.10

Let Ω be a probability space with probability measure p . The *expectation* $\mathbf{E}[X]$ of a random variable $X : \Omega \rightarrow \mathbf{R}$ is defined to be

$$\mathbf{E}[X] = \sum_{\omega \in \Omega} X(\omega) p_{\omega}.$$

Lemma 13.11

Let Ω be a probability space. If $X_1, X_2, \dots, X_k : \Omega \rightarrow \mathbf{R}$ are random variables then

$$\mathbf{E}[a_1 X_1 + a_2 X_2 + \dots + a_k X_k] = a_1 \mathbf{E}[X_1] + a_2 \mathbf{E}[X_2] + \dots + a_k \mathbf{E}[X_k]$$

for any $a_1, a_2, \dots, a_k \in \mathbf{R}$.

Lemma 13.12

If $X, Y : \Omega \rightarrow \mathbf{R}$ are independent random variables then $\mathbf{E}[XY] = \mathbf{E}[X]\mathbf{E}[Y]$.

Example of Linearity of Expectation (Question 11, Sheet 7)

- 11.** Let $0 \leq p \leq 1$ and let $n \in \mathbf{N}$. Suppose that a coin biased to land heads with probability p is tossed n times. Let X be the number of times the coin lands heads.
- (a) Describe a suitable probability space Ω and probability measure $\mathbf{P} : \Omega \rightarrow \mathbf{R}$ and define X as a random variable $\Omega \rightarrow \mathbf{R}$.
 - (b) Find $\mathbf{E}[X]$ and $\mathbf{Var}[X]$. [*Hint: write X as a sum of n independent random variables and use linearity of expectation and Lemma 13.14(ii).*]
 - (c) Find a simple closed form for the generating function $\sum_{k=0}^{\infty} \mathbf{P}[X = k]x^k$. (Such power series are called *probability generating functions*.)

Variance

Definition 13.13

Let Ω be a probability space. The *variance* $\mathbf{Var}[X]$ of a random variable $X : \Omega \rightarrow \mathbf{R}$ is defined to be

$$\mathbf{Var}[X] = \mathbf{E}[(X - \mathbf{E}[X])^2].$$

Lemma 13.14

Let Ω be a probability space.

(i) If $X : \Omega \rightarrow \mathbf{R}$ is a random variable then

$$\mathbf{Var}[X] = \mathbf{E}[X^2] - (\mathbf{E}[X])^2.$$

(ii) If $X, Y : \Omega \rightarrow \mathbf{R}$ are independent random variables then

$$\mathbf{Var}[X + Y] = \mathbf{Var}[X] + \mathbf{Var}[Y].$$

§14: Introduction to Probabilistic Methods

Throughout this section we fix $n \in \mathbf{N}$ and let Ω be the set of all permutations of the set $\{1, 2, \dots, n\}$. Define a probability measure on Ω so that permutations are chosen uniformly at random.

Exercise: Let $x \in \{1, 2, \dots, n\}$ and let $A_x = \{\sigma \in \Omega : \sigma(x) = x\}$. Then A_x is the event that a permutation fixes x . What is the probability of A_x ?

Theorem 14.1

Let $F : \Omega \rightarrow \mathbf{N}_0$ be defined so that $F(\sigma)$ is the number of fixed points of the permutation $\sigma \in \Omega$. Then $\mathbf{E}[F] = 1$.

Cycles

Definition 14.2

A permutation σ of $\{1, 2, \dots, n\}$ acts as a k -cycle on a k -subset $S \subseteq \{1, 2, \dots, n\}$ if S has distinct elements x_1, x_2, \dots, x_k such that

$$\sigma(x_1) = x_2, \sigma(x_2) = x_3, \dots, \sigma(x_k) = x_1.$$

If $\sigma(y) = y$ for all $y \in \{1, 2, \dots, n\}$ such that $y \notin S$ then we say that σ is a k -cycle, and write

$$\sigma = (x_1, x_2, \dots, x_k).$$

Definition 14.3

We say that cycles (x_1, x_2, \dots, x_k) and $(y_1, y_2, \dots, y_\ell)$ are *disjoint* if

$$\{x_1, x_2, \dots, x_k\} \cap \{y_1, y_2, \dots, y_\ell\} = \emptyset.$$

Cycle Decomposition of a Permutation

Lemma 14.4

A permutation σ of $\{1, 2, \dots, n\}$ can be written as a composition of disjoint cycles. The cycles in this composition are uniquely determined by σ .

Exercise: Write the permutation of $\{1, 2, 3, 4, 5, 6\}$ defined by $\sigma(1) = 3$, $\sigma(2) = 4$, $\sigma(3) = 1$, $\sigma(4) = 6$, $\sigma(5) = 5$, $\sigma(6) = 2$ as a composition of disjoint cycles.

Theorem 14.5

Let $1 \leq k \leq n$ and let $x \in \{1, 2, \dots, n\}$. The probability that x lies in a k -cycle of a permutation of $\{1, 2, \dots, n\}$ chosen uniformly at random is $1/n$.

Application to Derangements

Theorem 14.6

Let p_n be the probability that a permutation of $\{1, 2, \dots, n\}$ chosen uniformly at random is a derangement. If $n \in \mathbf{N}$ then

$$p_n = \frac{p_{n-2}}{n} + \frac{p_{n-3}}{n} + \dots + \frac{p_1}{n} + \frac{p_0}{n}.$$

Corollary 14.7

For all $n \in \mathbf{N}_0$,

$$p_n = 1 - \frac{1}{1!} + \frac{1}{2!} - \frac{1}{3!} + \dots + \frac{(-1)^n}{n!}.$$

It may be helpful to compare this result with Lemma 9.6 [**not Lemma 9.7, misprint in printed notes**]: there we get a recurrence by considering fixed points; here we get a recurrence by considering cycles.

Counting Cycles

We can also generalize Theorem 14.1.

Theorem 14.8

Let $C_k : \Omega \rightarrow \mathbf{R}$ be the random variable defined so that $C_k(\sigma)$ is the number of k -cycles in the permutation σ of $\{1, 2, \dots, n\}$.

Then $\mathbf{E}[C_k] = 1/k$ for all k such that $1 \leq k \leq n$.

§15: Ramsey Numbers and the First Moment Method

Lemma 15.1 (First Moment Method)

Let Ω be a probability space and let $M : \Omega \rightarrow \mathbf{N}_0$ be a random variable taking values in \mathbf{N}_0 . If $\mathbf{E}[M] = x$ then

- (i) $\mathbf{P}[M \geq x] > 0$, so there exists $\omega \in \Omega$ such that $M(\omega) \geq x$.
- (ii) $\mathbf{P}[M \leq x] > 0$, so there exists $\omega' \in \Omega$ such that $M(\omega') \leq x$.

Exercise: Check that the lemma holds in the case when

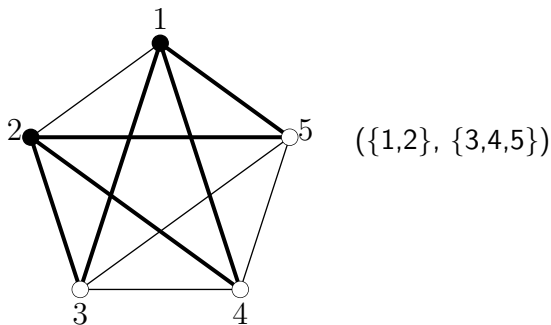
$$\Omega = \{1, 2, 3, 4, 5, 6\} \times \{1, 2, 3, 4, 5, 6\}$$

models the throw of two fair dice and $M(x, y) = x + y$.

Cut sets in graphs

Definition 15.2

Let G be a graph with vertex set V . A *cut* (A, B) of G is a partition of V into two subsets A and B . The *capacity* of a cut (A, B) is the number of edges of G that meet both A and B .



Theorem 15.3

Let G be a graph with vertex set $\{1, 2, \dots, n\}$ and m edges. There is a cut of G with capacity $\geq m/2$.

Application to Ramsey Theory

Lemma 15.4

Let $n \in \mathbf{N}$ and let Ω be the set of all red-blue colourings of the complete graph K_n . Let $p_\omega = 1/|\Omega|$ for each $\omega \in \Omega$. Then

- (i) each colouring in Ω has probability $1/2^{\binom{n}{2}}$;
- (ii) given any m edges in G , the probability that all m of these edges have the same colour is 2^{1-m} .

Theorem 15.5

Let $n, s \in \mathbf{N}$. If

$$\binom{n}{s} 2^{1-\binom{s}{2}} < 1$$

then there is a red-blue colouring of the complete graph on $\{1, 2, \dots, n\}$ with no red K_s or blue K_s .

Lower bound on $R(s, s)$

Corollary 15.6

For any $s \in \mathbf{N}$ with $s \geq 2$ we have

$$R(s, s) \geq 2^{(s-1)/2}.$$

This result can be strengthened slightly using the Lovász Local Lemma. See the printed lecture notes for an outline. (The contents of §16 are non-examinable.)

§16: Lovász Local Lemma

Let Ω be a probability space and let A_1, \dots, A_n be events in A .

Definition 16.1

Let $T \subseteq \{1, 2, \dots, n\}$. We say that A_i is *mutually independent* of the events $\{A_j : j \in T\}$ if for all $U, U' \subseteq T$ such that $U \cap U' = \emptyset$ we have

$$\mathbf{P}\left[A_i \mid \left(\bigcap_{k \in U} A_k\right) \cap \left(\bigcap_{\ell \in U'} \bar{A}_\ell\right)\right] = \mathbf{P}[A_i],$$

provided the event conditioned on has non-zero probability.

Definition 16.2

Let G be a digraph with edge set

$$E \subseteq \{(i, j) : 1 \leq i, j \leq n, i \neq j\}.$$

If A_i is mutually independent of $\{A_j : (i, j) \notin E\}$ for all $i \in \{1, 2, \dots, n\}$ then we say that G is a *dependency digraph* for the events A_1, A_2, \dots, A_n .

Lemma 16.3 (Asymmetric Lovász Local Lemma)

Let G be a dependency digraph with edge set E for the events A_1, \dots, A_n . Suppose there exist $x_i \in \mathbf{R}$ such that $0 \leq x_i < 1$ and

$$P[A_i] \leq x_i \prod_{j:(i,j) \in E} (1 - x_j)$$

for all i . Then

$$\mathbf{P}\left[\bigcap_{i=1}^n \bar{A}_i\right] \geq \prod_{i=1}^n (1 - x_i).$$

Claim (to be proved by induction on $|S|$). Let $S \subseteq \{1, 2, \dots, n\}$ and suppose $i \notin S$. Then

$$\mathbf{P}\left[\bigcap_{j \in S} \bar{A}_j\right] \neq 0$$

and

$$\mathbf{P}\left[A_i \mid \bigcap_{j \in S} \bar{A}_j\right] \leq x_i.$$

Corollary 16.4 (Symmetric Lovász Local Lemma)

Suppose that the maximum degree in a dependency digraph for the events A_1, \dots, A_n is d . If $\mathbf{P}[A_i] \leq p$ for all i and $ep(d+1) \leq 1$ then

$$\mathbf{P}\left[\bigcap_{i=1}^n \bar{A}_i\right] \geq 0.$$

Application to diagonal Ramsey numbers

Theorem 16.5

Let $n, s \in \mathbf{N}$ with $s \geq 3$. If

$$e \binom{s}{2} \binom{n-2}{s-2} 2^{1-\binom{s}{2}} < 1$$

then there is a red-blue colouring of the complete graph K_n with no red K_s or blue K_s .

Example 16.6

When $s = 15$, the largest n such that $\binom{n}{15} 2^{1-\binom{15}{2}} < 1$ is $n = 792$. So Theorem 15.5 tells us that $R(15, 15) > 792$. But

$$e \binom{15}{2} \binom{n-2}{15-2} 2^{1-\binom{15}{2}} < 1$$

provided $n \leq 947$. So Theorem 16.5 implies that $R(15, 15) > 947$.

Proposition 16.7

Let $s \geq 9$. Then $R(s, s) \geq 2^{(s-1)/2} s/e$.

Application to edge disjoint paths

Suppose that G is a graph and that $\mathcal{F}_1, \dots, \mathcal{F}_n$ are sets of paths in G of length at least m such that if $i \neq j$ and $P \in \mathcal{F}_i$ and $Q \in \mathcal{F}_j$ then P and Q have at most k edges in common.

Proposition 16.8

If

$$n \leq \frac{m}{2ke}$$

then there are paths $P_1 \in \mathcal{F}_1, \dots, P_n \in \mathcal{F}_n$ such that P_1, \dots, P_n are edge disjoint.

For an application of the asymmetric Lovász Local Lemma to the Ramsey number $R(3, t)$ see the printed notes (Section 16 is updated and extended on Moodle).